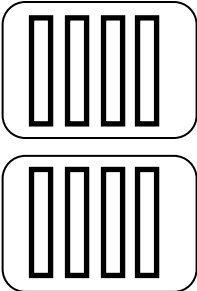



Name:

Weekly Homework Sheet (4)

Date: September 14-18, 2015

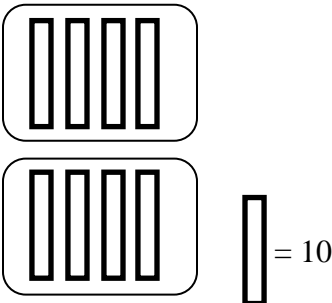
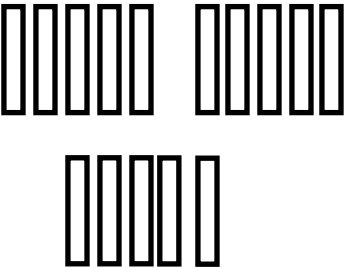
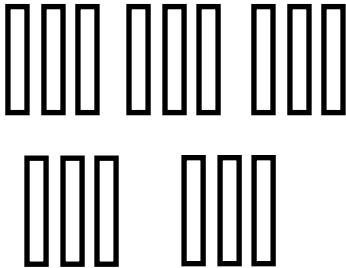
Monday	Tuesday	Wednesday	Thursday
Order the numbers from GREATEST to LEAST. 734 1,156 499	Circle all the ODD numbers. 21 34 67 120 78 87	Order the numbers from LEAST to GREATEST. 628 863 266	Circle all the EVEN numbers. 32 54 45 145 90 48
What is the place value of the underlined digit? 4, <u>3</u> 89	What is the place value of the underlined digit? 7, <u>2</u> 95	What is the place value of the underlined digit? <u>1</u> ,840	What is the place value of the underlined digit? 4, <u>8</u> 39
What is the sum of 487 and 310.	What is the sum of 196 and 482.	What is the sum of 703 and 620.	What is the sum of 279 and 217.
Round each number to the nearest 10. 62 _____ 533 _____ 86 _____	Round each number to the nearest 10. 338 _____ 831 _____ 798 _____	Round each number to the nearest 10. 46 _____ 735 _____ 203 _____	Round each number to the nearest 10. 308 _____ 57 _____ 275 _____
Round each number to the nearest 100. 201 _____ 472 _____ 527 _____	Round each number to the nearest 100. 777 _____ 780 _____ 150 _____	Round each number to the nearest 100. 236 _____ 483 _____ 314 _____	Round each number to the nearest 100. 463 _____ 928 _____ 976 _____
Find the Sum. $\begin{array}{r} 384 \\ + 496 \\ \hline \end{array}$	Find the Sum of 536 and 232.	Find the Sum. $\begin{array}{r} 176 \\ + 988 \\ \hline \end{array}$	Find the Sum of 437 and 382.
Find the Difference. $\begin{array}{r} 726 \\ - 477 \\ \hline \end{array}$	Find the difference between 827 and 533.	Find the Difference. $\begin{array}{r} 800 \\ - 326 \\ \hline \end{array}$	Find the difference between 304 and 217.
Find the missing addend. $82 + \underline{\quad} = 123$	Find the missing addend. $\underline{\quad} + 74 = 137$	Find the missing addend. $88 + \underline{\quad} = 104$	Find the missing addend. $48 + \underline{\quad} = 162$
Solve $2 \times 40 = \underline{\quad}$   = 10	Draw a picture that represents $3 \times 50 = 150$	Draw a picture that represents 5×30 . SOLVE	Draw a picture that represents 4×20 . SOLVE

My Work

<p style="text-align: center;">Monday</p>	<p style="text-align: center;">Tuesday</p>
<p style="text-align: center;">Wednesday</p>	<p style="text-align: center;">Thursday</p>

My Progress

MONDAY	TUESDAY	WEDNESDAY	THURSDAY
# of questions ____	# of questions ____	# of questions ____	# of questions ____
# correct ____	# correct ____	# correct ____	# correct ____
I need more help with...	I need more help with...	I need more help with...	I need more help with...
_____	_____	_____	_____
_____	_____	_____	_____
_____	_____	_____	_____
_____	_____	_____	_____
_____	_____	_____	_____
_____	_____	_____	_____

Monday	Tuesday	Wednesday	Thursday
Order the numbers from GREATEST to LEAST. 734 1,156 499 1,156 734 499	Circle all the ODD numbers. 21 34 67 120 78 87 21, 67, 87	Order the numbers from LEAST to GREATEST. 628 863 266 266 628 863	Circle all the EVEN numbers. 32 54 45 145 90 48 32, 54, 90, 48
What is the place value of the underlined digit? 4, <u>3</u> 89 Hundreds	What is the place value of the underlined digit? 7, <u>2</u> 95 tens	What is the place value of the underlined digit? <u>1</u> ,840 thousands	What is the place value of the underlined digit? 4, <u>8</u> 39 ones
Estimate the sum of 487 and 310. =800	Estimate the sum of 196 and 482. =700	Estimate the sum of 703 and 620. =1,300	Estimate the sum of 279 and 217. =500
Round each number to the nearest 10. 62 _____ 60 533 _____ 530 86 _____ 90	Round each number to the nearest 10. 338 _____ 340 831 _____ 830 798 _____ 800	Round each number to the nearest 10. 46 _____ 50 735 _____ 740 203 _____ 200	Round each number to the nearest 10. 308 _____ 310 57 _____ 60 275 _____ 280
Round each number to the nearest 100. 201 _____ 200 472 _____ 500 527 _____ 500	Round each number to the nearest 100. 777 _____ 800 780 _____ 800 150 _____ 200	Round each number to the nearest 100. 236 _____ 200 483 _____ 500 314 _____ 300	Round each number to the nearest 100. 463 _____ 500 928 _____ 900 976 _____ 1,000
Find the Sum. $\begin{array}{r} 384 \\ + 496 \\ \hline 880 \end{array}$	Find the Sum of 536 and 232. 768	Find the Sum. $\begin{array}{r} 176 \\ + 988 \\ \hline 1,164 \end{array}$	Find the Sum of 437 and 382. 819
Find the Difference. $\begin{array}{r} 726 \\ - 477 \\ \hline 249 \end{array}$	Find the difference between 827 and 533. 294	Find the Difference. $\begin{array}{r} 800 \\ - 326 \\ \hline 474 \end{array}$	Find the difference between 304 and 217. 87
Find the missing addend. $82 + \underline{41} = 123$	Find the missing addend. $\underline{63} + 74 = 137$	Find the missing addend. $88 + \underline{16} = 104$	Find the missing addend. $48 + \underline{114} = 162$
Solve $2 \times 40 = \underline{80}$ 	Draw a picture that represents $3 \times 50 = 150$ 	Solve 5×30 . Draw a picture. 150 	Solve 4×20 . Draw a picture. 80 